

Name.....

Objective: Find $\frac{1}{4}$ of an amount

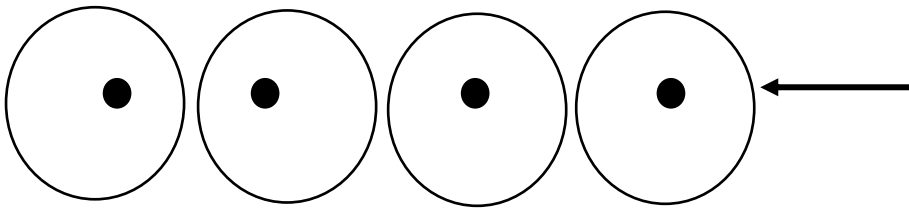
Example:

$$\frac{1}{4} \text{ of } 4$$

There are 4 parts altogether.

We need to share the total amount by the number of parts.

The total amount is 4. We need to share this between the 4 groups to find $\frac{1}{4}$.

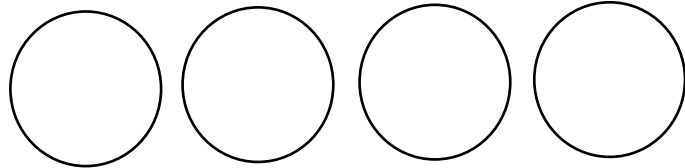


There is 1 in each circle.

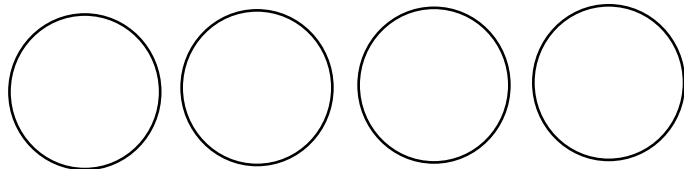
$$\frac{1}{4} \text{ of } 4 = 1$$

Answer the following questions

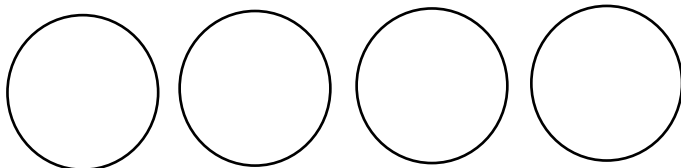
a) $\frac{1}{4}$ of 12 =



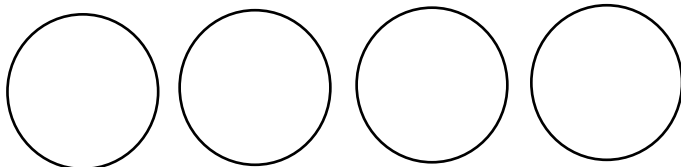
b) $\frac{1}{4}$ of 8 =



c) $\frac{1}{4}$ of 16 =



d) $\frac{1}{4}$ of 20 =



e) $\frac{1}{4}$ of 24 =

